

Name:

Grade 2

Revision exercises: Numbers (11 - 19) page1

Maths

1. Write down the correct numeral and its number name.

a) Example:

| | |
|------------------------------|-------|
| 19 | |
| ten | units |
| 1 | 9 |
| Number name: nineteen | |

d)

| | |
|--------------|-------|
| 14 | |
| ten | units |
| | |
| Number name: | |

b)

| | |
|--------------|-------|
| 12 | |
| ten | units |
| | |
| Number name: | |

c)

| | |
|--------------|-------|
| 15 | |
| ten | units |
| | |
| Number name: | |

Name:

Grade 2

Revision exercises: Numbers (11 - 19) page2

Maths

2. Write the correct numeral.

a) 13 = ____ ten and ____ units

b) 16 = ____ ten and ____ units

c) 18 = ____ ten and ____ units

d) 11 = ____ ten and ____ unit

e) 12 = ____ ten and ____ units

f) 19 = ____ ten and ____ units

g) 14 = ____ ten and ____ units

h) 17 = ____ ten and ____ units

Name:

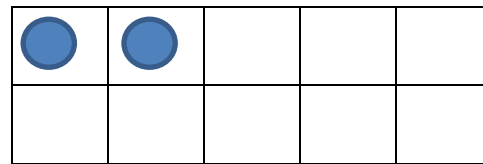
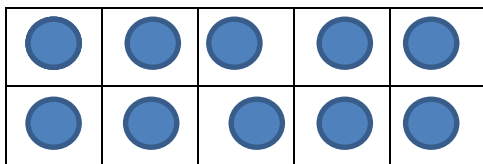
Grade 2

Revision exercises: Numbers (11 - 19) page3

Maths

3. Complete the ten frames.

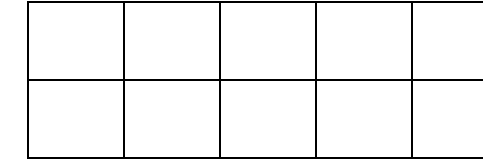
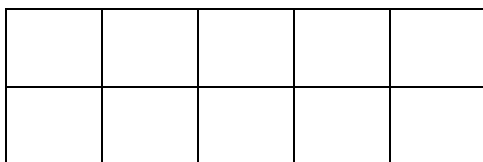
a) Example : 12




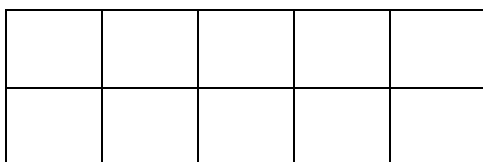
b) 15



c) 18



d) 17



Name:

Grade 2

Revision exercises: Numbers (11 - 19) page4

Maths

4. Write the number names.

11 _____

19 _____

12 _____

13 _____

14 _____

15 _____

16 _____

17 _____

18 _____